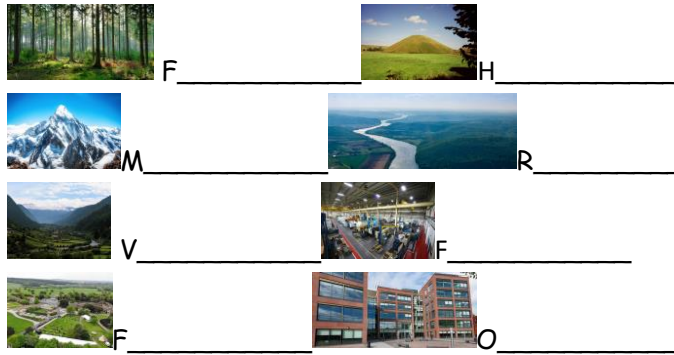
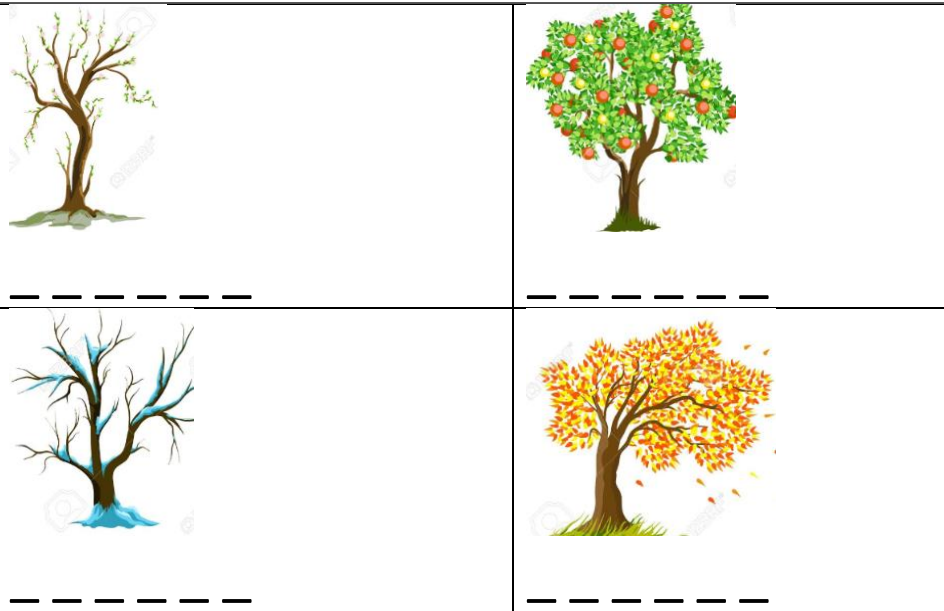


Can you label these pictures?

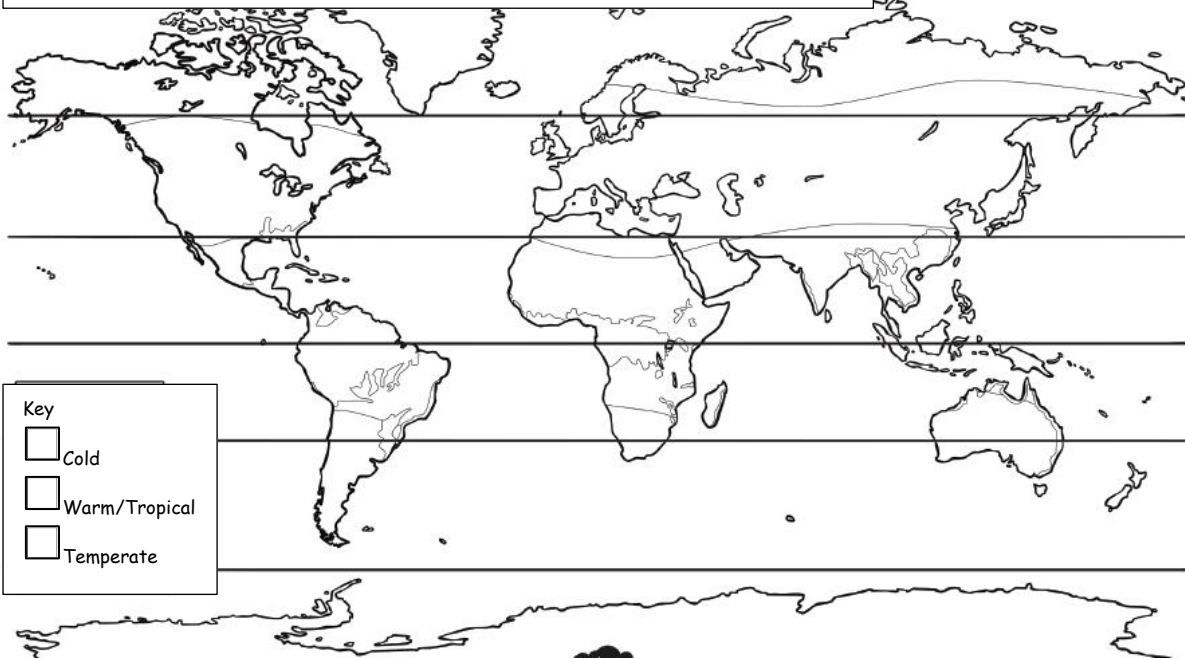


The seasons! Name the seasons and draw lines to where the other pictures



What is the difference between a city, town and village?

Colour in the climate of the world. Remember to complete the key.



Key

Cold

Warm/Tropical

Temperate



Can you match the weather to the picture?

sun and cloud
rain
sun



thunder and lightning
rainbow
wind



Tick the correct boxes	Forest 	Rainforest 
Has a tropical climate	<input type="checkbox"/>	<input type="checkbox"/>
An area covered by trees	<input type="checkbox"/>	<input type="checkbox"/>
It is a habitat for many animals	<input type="checkbox"/>	<input type="checkbox"/>

Can you label these pictures?



The seasons! Name the seasons and draw lines to where the other pictures

Spring Summer

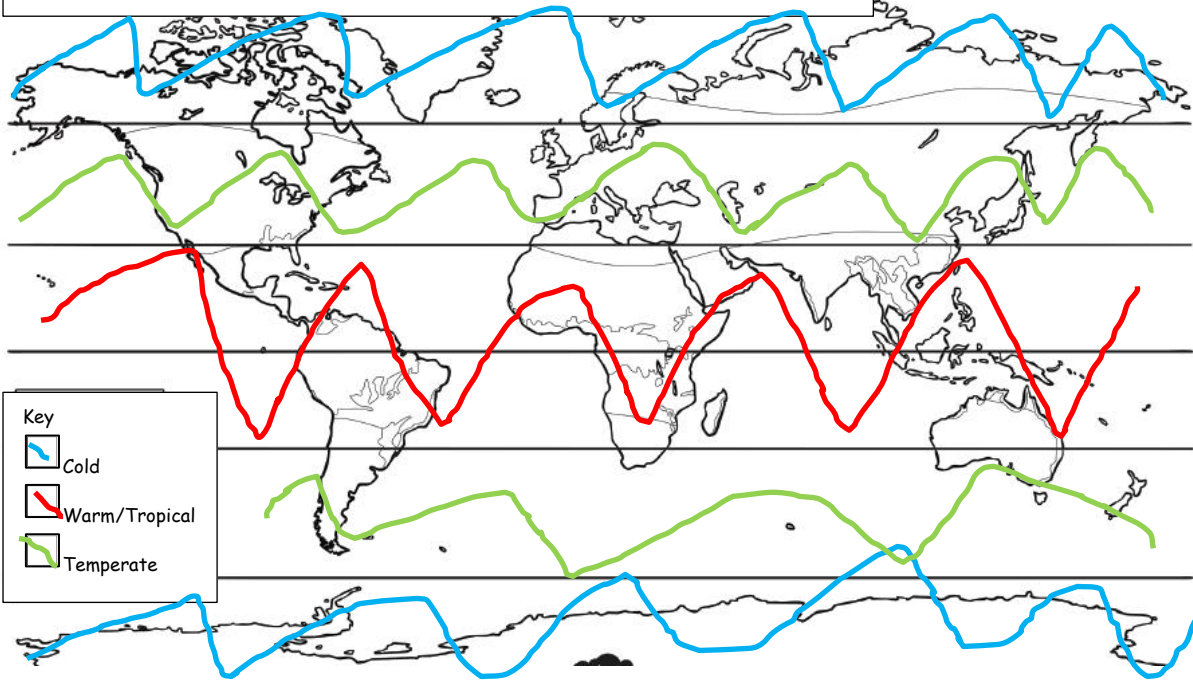
Winter Autumn



What is the difference between a city, town and village?

- A village is a small community in a rural area.
- A town has lots of people with fixed boundaries.
- A city is a large or important town.

Colour in the climate of the world. Remember to complete the key.



Key

- Cold
- Warm/Tropical
- Temperate

Can you match the weather to the picture?

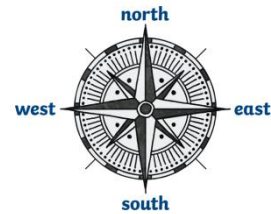
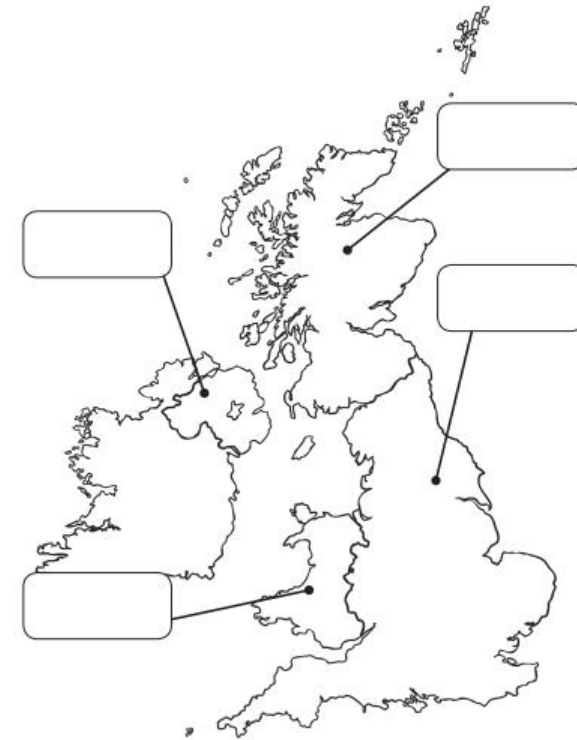
sun and cloud rain sun thunder and lightning rainbow wind





Tick the correct boxes	Forest	Rainforest
Has a tropical climate		✓
An area covered by trees	✓	✓
It is a habitat for many animals	✓	✓

Can you label the 7 continents and 5 oceans?



Can you label the countries in the UK?



crossroads 	 school	
	 Manorial Barn	Whiston Parish Church 

Complete these sentences

The **Manorial Barn** is _____ of **school**.

The **Crossroads** are _____ of **school**.

Whiston Parish Church is _____ of the **Manorial Barn**.

Draw a tick one box **north** of school.

Complete these sentences.



The capital city of **England** is _____.



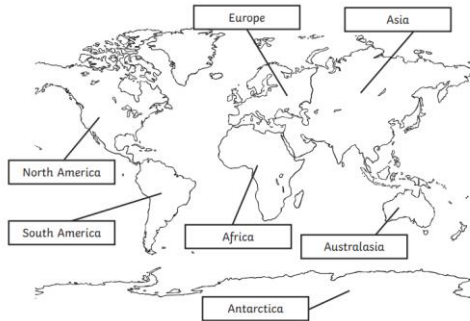
Edinburgh is the capital city of _____.



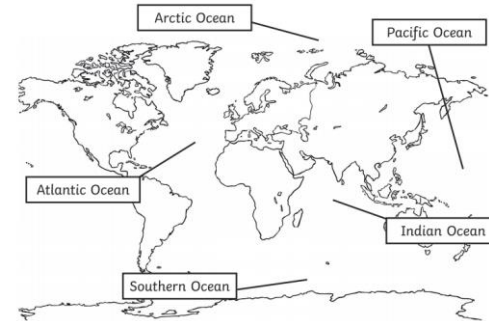
The capital city of Northern Ireland is _____.



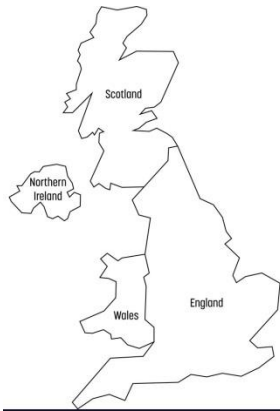
Cardiff is the capital city of _____.



7 Continents answers: _____



5 Oceans answers: _____



Countries in UK answers _____

Complete these sentences.



The capital city of **England** is London.



Edinburgh is the capital city of Scotland.



The capital city of Northern Ireland is Belfast.



Cardiff is the capital city of Wales.

Complete these sentences answers

The **Manorial Barn** is south of school.

The **Crossroads** are west of school.

Whiston Parish Church is east of the **Manorial Barn**.

Draw a tick one box **north** of school.



Can you colour in Europe?



Name 8 European countries:

- 1) _____
- 2) _____
- 3) _____
- 4) _____
- 5) _____
- 6) _____
- 7) _____
- 8) _____

Complete these sentences.



The capital city of **England** is _____.




Madrid is the capital of _____.



The capital city of **Italy** is _____.



Athens is the capital city of _____.



The capital city of **France** is _____.



Berlin is the capital of _____.

Find and name 4 countries in the northern hemisphere and 4 countries southern hemisphere.



Name 5 differences or similarities between the **UK** and a **Mediterranean** country?

Tick the correct boxes	Developed country	Developing country
The country is more industrially developed		
The country is in a worse economic position.		
The country has better income, health and education systems		
Life expectancy is low.		

Can you colour in Europe?



Name 8 European countries:

Albania, Andorra, Austria, Belarus, Belgium, Bosnia and Herzegovina, Bulgaria, Croatia, Czech Republic, Denmark, Estonia, Finland, France, Germany, Greece, Holy See, Hungary, Iceland, Ireland, Italy, Latvia, Liechtenstein, Lithuania, Luxemburg, Malta, Moldova, Monaco, Netherlands, North Macedonia, Montenegro, Norway, Poland, Portugal, Romania, Russia, San Marino, Serbia, Slovakia, Slovenia, Spain, Sweden, Switzerland, Ukraine, United Kingdom

Complete these sentences.



The capital city of **England** is _____.



Madrid is the capital of _____.



The capital city of **Italy** is _____.



Athens is the capital city of _____.



The capital city of **France** is _____.



Berlin is the capital of _____.

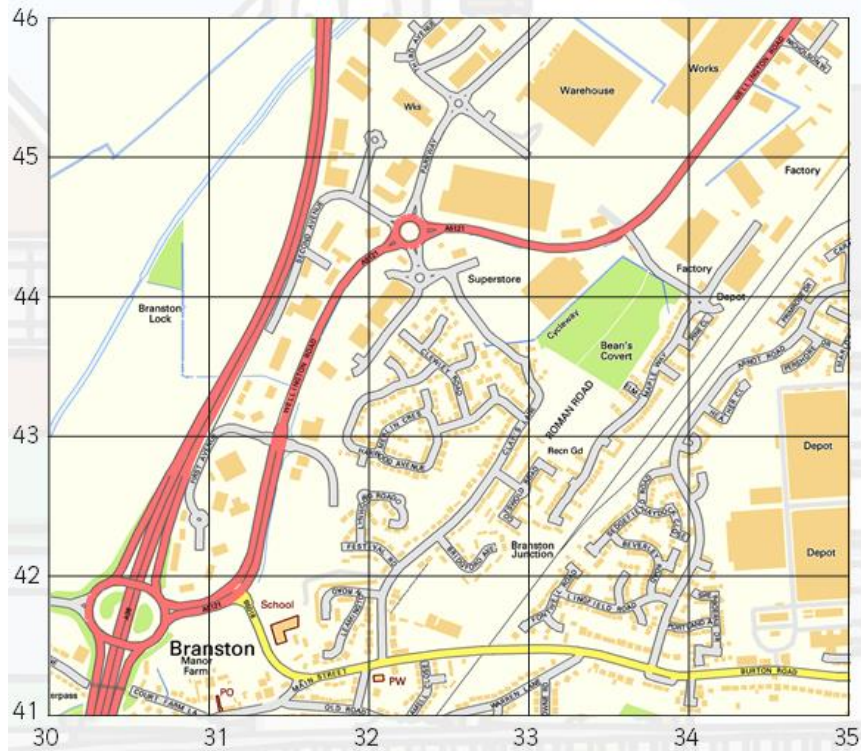
Find and name 4 countries in the northern hemisphere and 4 countries southern hemisphere.



Name 5 differences or similarities between the UK and a **Mediterranean** country?

- Mediterranean has a larger coastline (28600miles compare to 19491miles).
- Warmer climate than the UK.
- UK is made up of 4 countries but the Mediterranean is made up of 22 countries.
- The UK is in Europe, some Mediterranean countries are in Europe but not all of them.
- (Linked to Spain)
- UK's population 66.65 million, Spain has a smaller population of 46 million.
- Both Spain and the UK have a parliamentary monarchy.
- Spain and the UK are both in Europe. (Other answers may be accepted)

Tick the correct boxes	Developed country	Developing country
The country is more industrially developed		
The country is in a worse economic position.		
The country has better income, health and education systems		
Life expectancy is low.		




Follow the grid references and map your route.
 Start at (33,45)
 Then travel south to (33,43)
 Finally travel south west to (31,41)

Where did you visit?
 1) _____
 2) _____
 3) _____

What is **deforestation**?

How would you describe your journey from the Post Office to the Roman Road and then to the superstore?

Write the correct number in each box.



canopy	<input type="checkbox"/>	It is very cool and windy in this layer.	<input type="checkbox"/>	Plants in this layer are no taller than 3m.	<input type="checkbox"/>	Snakes, toucans and treefrogs live here.	<input type="checkbox"/>
forest floor	<input type="checkbox"/>	This layer is dark, hot and humid.	<input type="checkbox"/>	Trees in this layer can be as tall as 60m.	<input type="checkbox"/>	Many insects live here.	<input type="checkbox"/>
understorey	<input type="checkbox"/>	This layer gets the most rain and sunlight.	<input type="checkbox"/>	Trees in this layer form a roof over lower layers.	<input type="checkbox"/>	Monkeys, bats and butterflies live here.	<input type="checkbox"/>
emergent	<input type="checkbox"/>	This layer gets almost no sunlight.	<input type="checkbox"/>	Almost no plants grow in this layer.	<input type="checkbox"/>	Gorillas, leopards and tigers live here.	<input type="checkbox"/>


Complete these sentences.


 The capital city of **China** is _____.

 The capital of **Japan** is _____.


 The capital city of **Russia** is _____.

 The capital city of **South Korea** is _____.

 The capital city of **Indonesia** is _____.

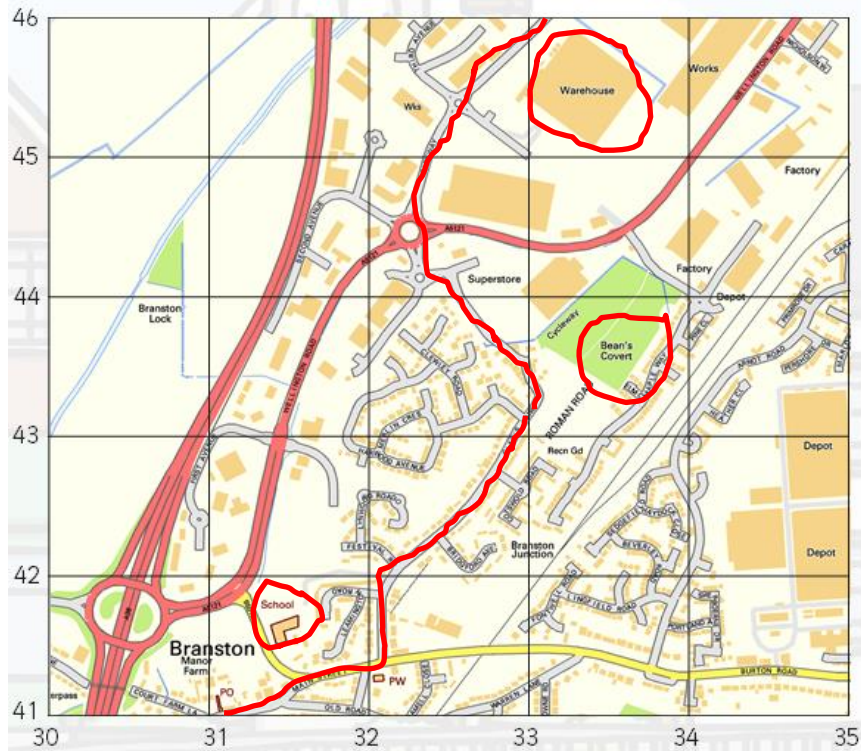
 The capital city of the **United Kingdom** is _____.

 The capital of **Egypt** is _____.

 The capital of **Mexico** is _____.

Label the map of England with **8 counties** and **6 cities**.





Follow the grid references and map your route.
 Start at (33,45)
 Then travel south to (33,43)
 Finally travel south west to (31,41)


Where did you visit?
 1) Warehouse
 2) Bean's Covert
 3) School

What is **deforestation**?
 Deforestation is the permanent removal of trees to make way for something else. This might be to create farms for cattle or food, to make timber for furniture, to make wood pulp for paper, to create space for housing.

How would you describe your journey from the Post Office to the Roman Road and then to the superstore?

Start at (31,41)
 Travel North East to (33,43)
 Finally travel north west to (32,44)

Write the correct number in each box.



canopy	2	It is very cool and windy in this layer.	1	Plants in this layer are no taller than 3m.	3	Snakes, toucans and treefrogs live here.	2
forest floor	4	This layer is dark, hot and humid.	3	Trees in this layer can be as tall as 60m.	1	Many insects live here.	3
understorey	3	This layer gets the most rain and sunlight.	2	Trees in this layer form a roof over lower layers.	2	Monkeys, bats and butterflies live here.	1
emergent	1	This layer gets almost no sunlight.	4	Almost no plants grow in this layer.	4	Gorillas, leopards and tigers live here.	4

Complete these sentences.



The capital city of **China** is **Beijing**.



The capital of **Japan** is **Tokyo**



The capital city of **Russia** is **Moscow**.



The capital city of **South Korea** is **Seoul**.



The capital city of **Indonesia** is **Jakarta**.



The capital city of the **United Kingdom** is **London**.



The capital of **Egypt** is **Cairo**.



The capital of **Mexico** is **Mexico City**.

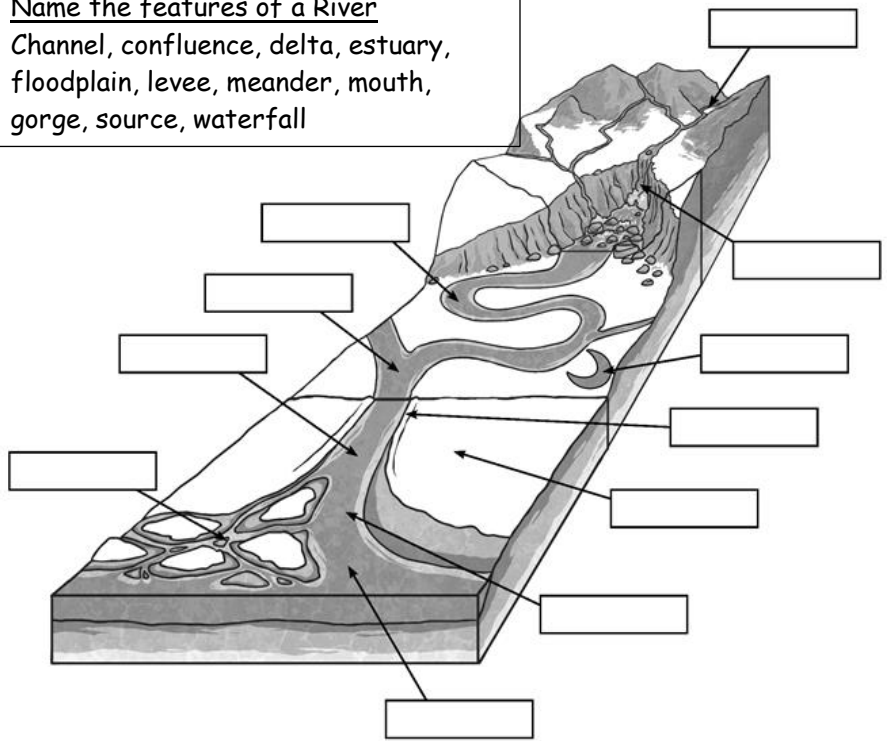
Label the map of England with **8 counties** and **6 cities**.



Name 3 main rivers in the UK

Why are most cities located next to a river?

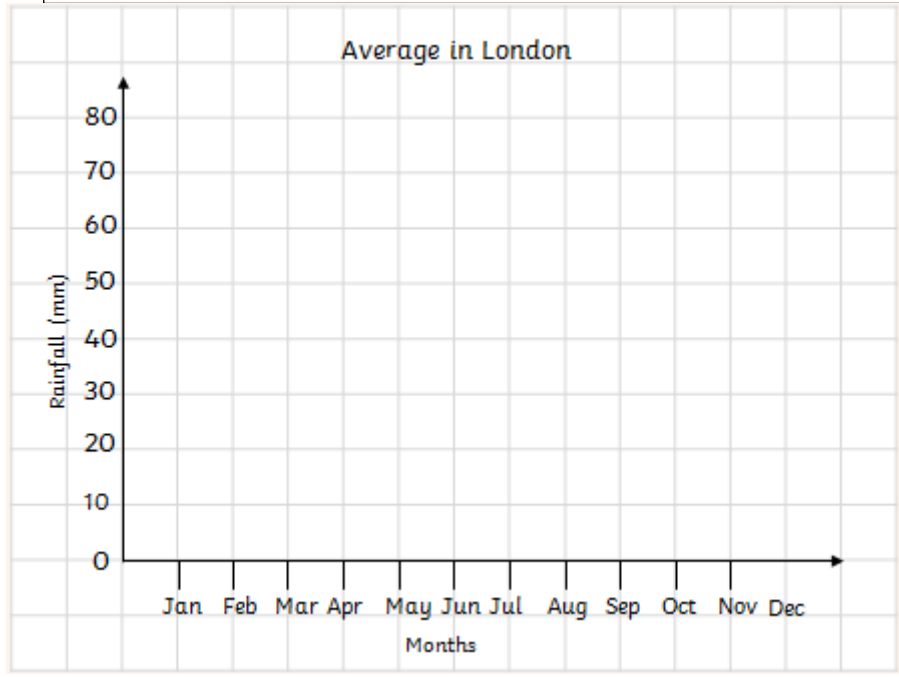
Name the features of a River
 Channel, confluence, delta, estuary,
 floodplain, levee, meander, mouth,
 gorge, source, waterfall



Label the blank world map with 3 of the world's longest rivers.

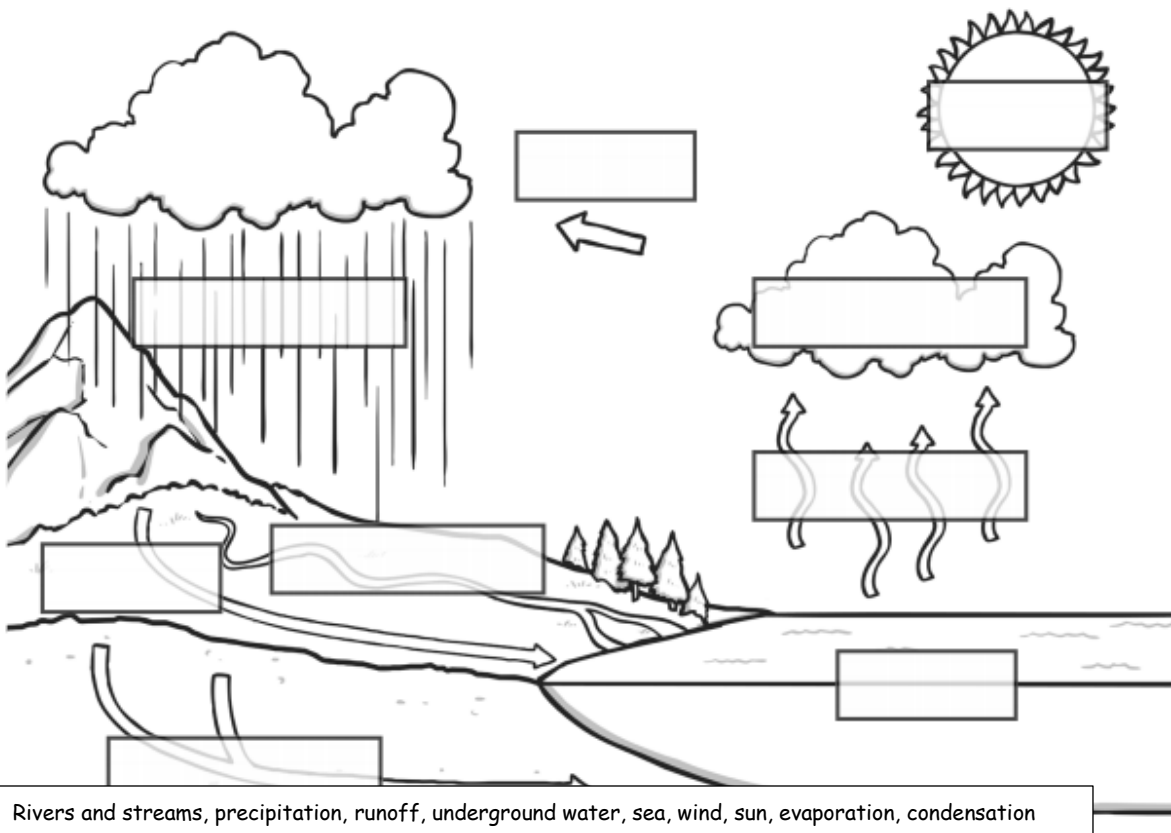


Plot the rainfall on the line graph



Month	Rainfall (mm)
January	54
February	40
March	38
April	38
May	48
June	46
July	58
August	60
September	50
October	57
November	65
December	50

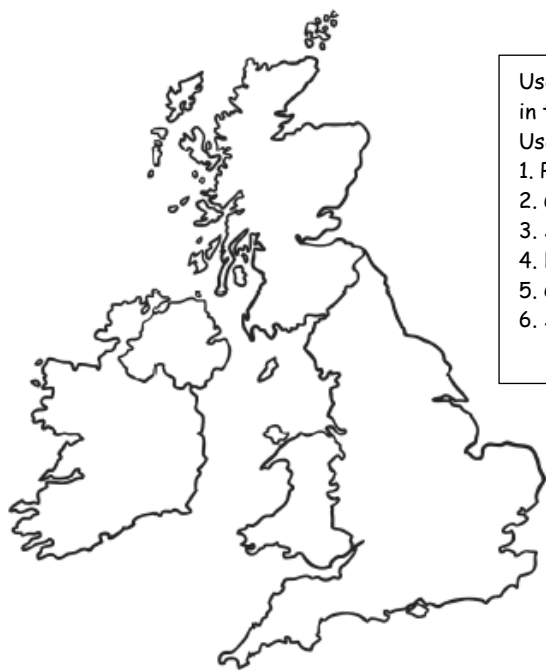
Label the water cycle



Label the following countries of the Americas. Uruguay, Canada, Mexico, Colombia, Ecuador, Costa Rica, Venezuela, Belize, Bolivia, USA.



Rivers and streams, precipitation, runoff, underground water, sea, wind, sun, evaporation, condensation



Use a brown pencil to shade in the higher ground in the UK.

Use the following numbers to identify each region.

1. Pennines
2. Grampian Mountains
3. Snowdonia
4. Dartmoor
5. Cumbrian Mountains
6. Sperrin Mountains

What is a key difference between living in the UK and a country in the Americas?

Name 3 main rivers in the UK

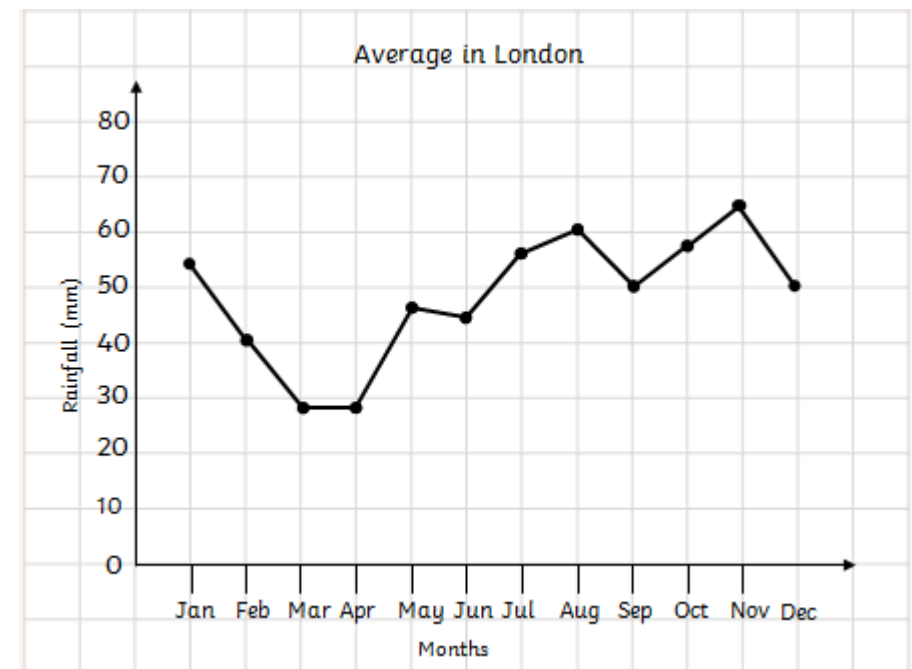
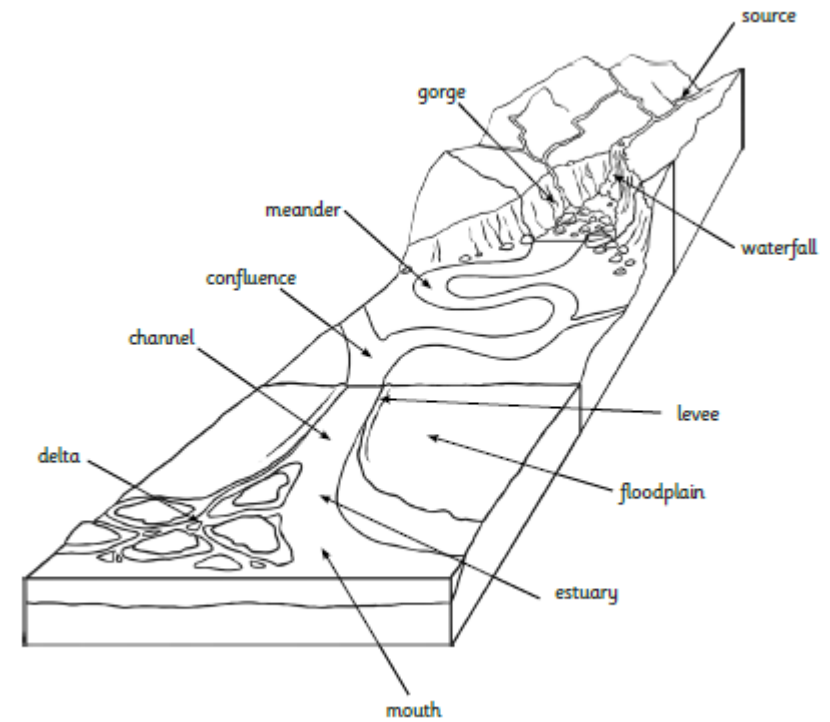
River Thames
River Severn
River Trent

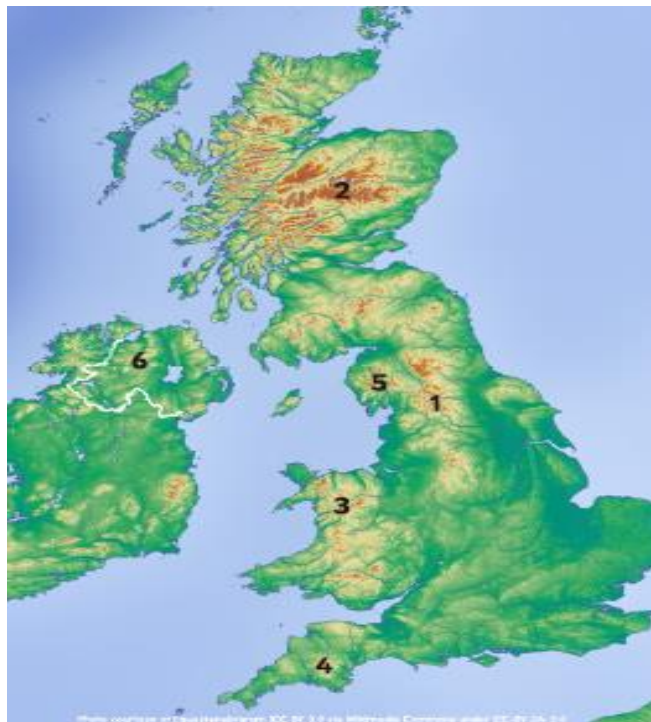
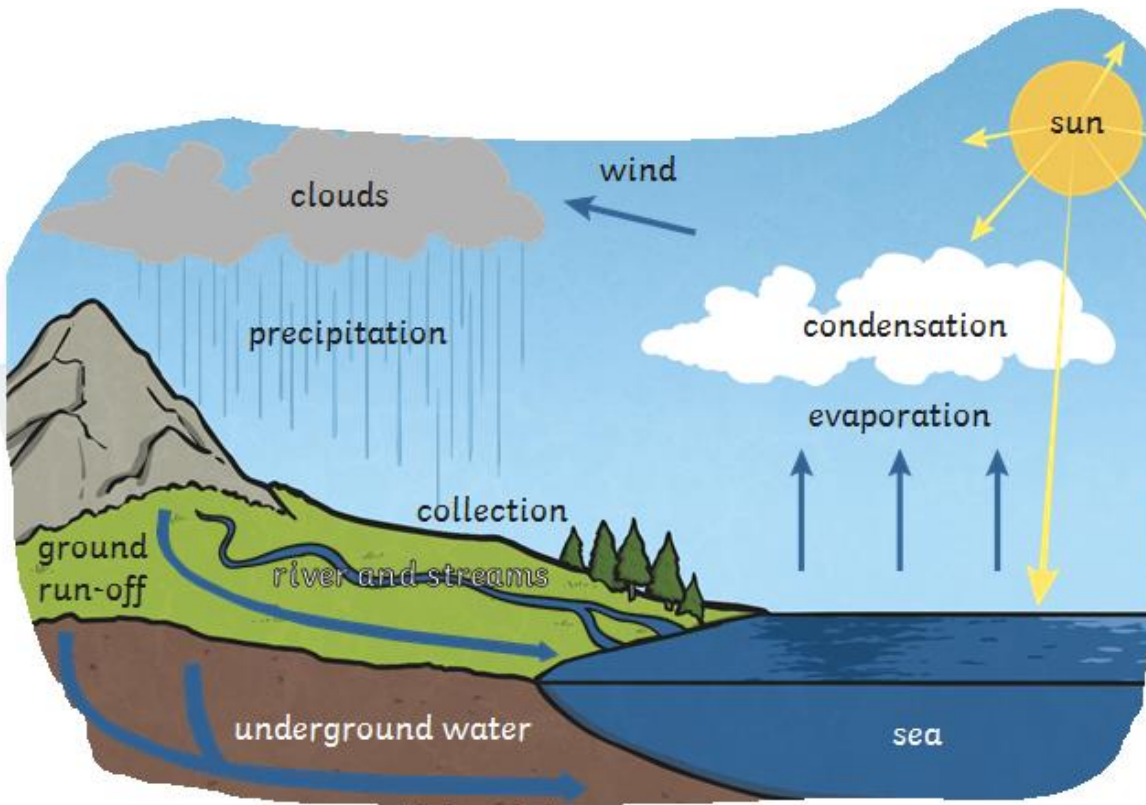


Why are most cities located next to a river?

Answers relating to water transportation, water trading routes, increases money to that city, cultural mixing.
Answers also relating to sustainability i.e. providing food and other resources, drinkable water

Label the blank world map with 3 of the world's longest rivers.



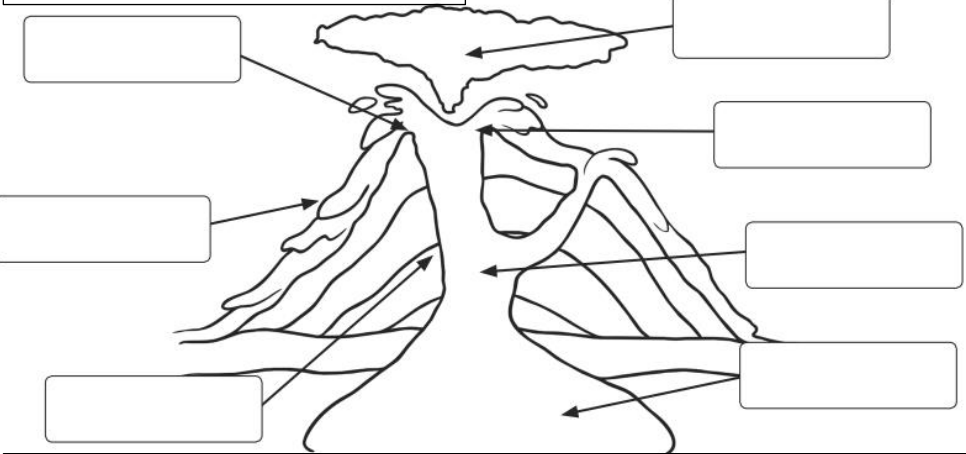


What is a key difference between living in the UK and a country in the Americas?

(based on comparison with Mexico)

- cost of living is more in the UK
- Mexico has a higher crime rate
- Mexico is a larger country by squared area.
- Mexico has a higher population (116million compared to 63million)
- Mexico has a climate that varies from tropical to desert. UK has mild temperatures, often windy and over one half of the days are over cast.

Label the parts of the volcano



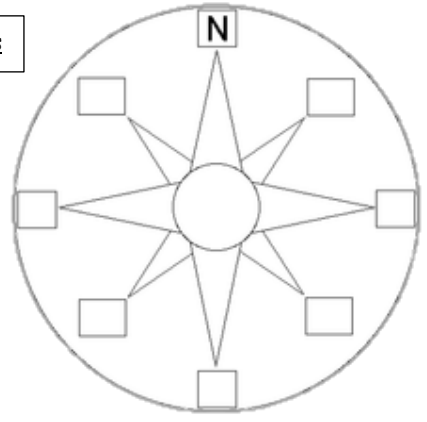
Main vent, lava flow, conduit, magma reservoir, ash cloud, crater, layers of ash and solidified lava

Label and draw lines to show the **equator**, **tropics of cancer**, **tropics of Capricorn** and **prime (Greenwich) meridian**.



Describe what causes an Earthquake

Complete the compass



What is meant by the word 'tropics'?

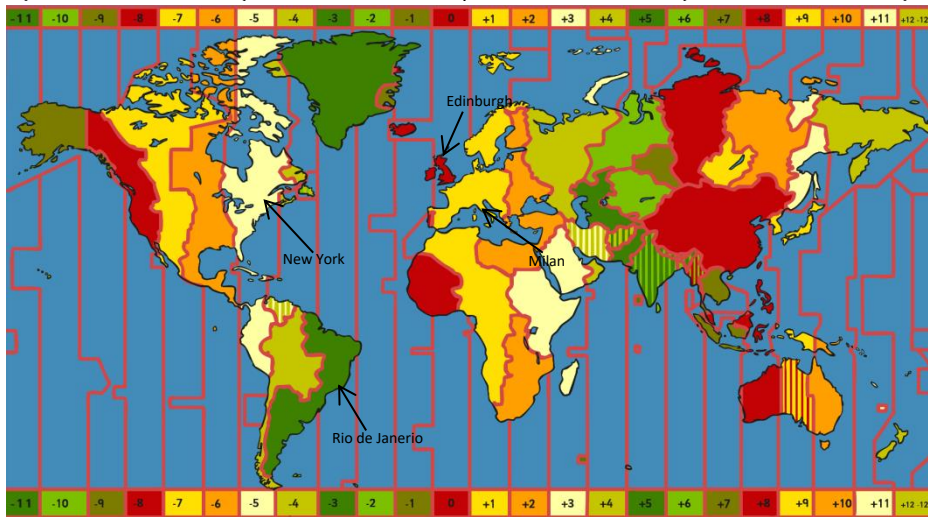
Time Zones



How do 'time zones' work?

What would the time difference be? Use the time difference map to help you.

	London Monday 06:00	Rio de Janeiro _____	
	London Thursday 21:45	New York _____	
	London Friday 14:22	Milan _____	
	London Tuesday 21:30	Edinburgh _____	



Match the symbols to their meaning

PO



Sch



Footpath

Station

Dual carriageway

Lighthouse

Post Office

Non-coniferous trees

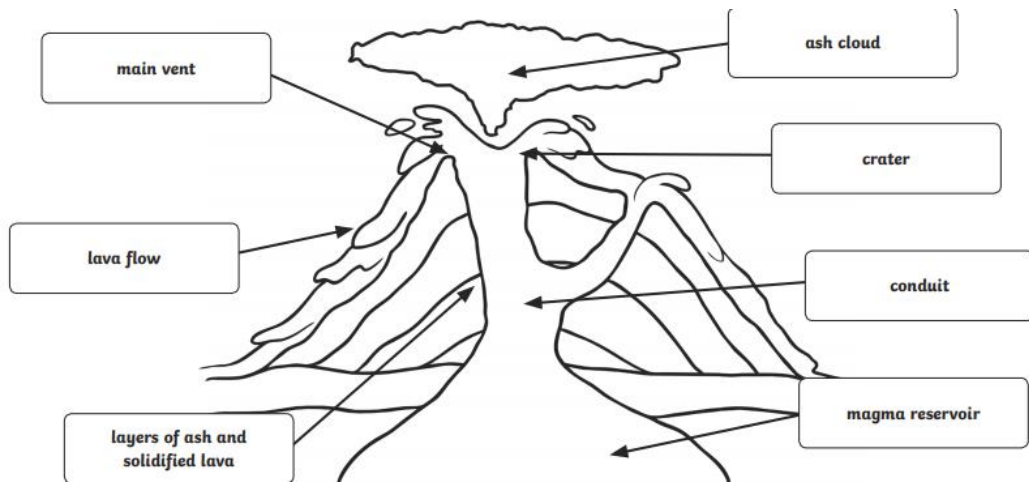
Building

Place of Worship

School

Locate on the map (at least 4): Denali, Aconcagua, Elbrus, Kilimanjaro, Vinson Massif, Everest, Kosciuszko





Describe what causes an Earthquake

An earthquake is caused by a sudden slip on a fault. The tectonic plates are always slowly moving, but they get stuck at their edges due to friction. When the stress on the edge overcomes the friction, there is an earthquake that releases energy in waves that travel through the earth's crust and cause the shaking that we feel.



What is meant by the word 'tropics'?

The Tropic of Cancer, or the Northern Tropic, is the circle of latitude on the Earth that marks the most northerly position at which the Sun can be directly overhead. It currently lies around 23.4° north of the Equator.

The Tropic of Capricorn, or Southern Tropic, marks the most southerly latitude on the Earth at which the Sun can be directly overhead. It currently lies around 23.4° south of the Equator.

Between the Tropics of Cancer and Capricorn, the weather is hot all year round.

Rainfall can be very varied in tropical locations - some areas have very little rain, some have a rainy season and some have fairly consistent rainfall throughout the year.

(Answers may not be as detailed - but these are examples)

How do 'time zones' work?

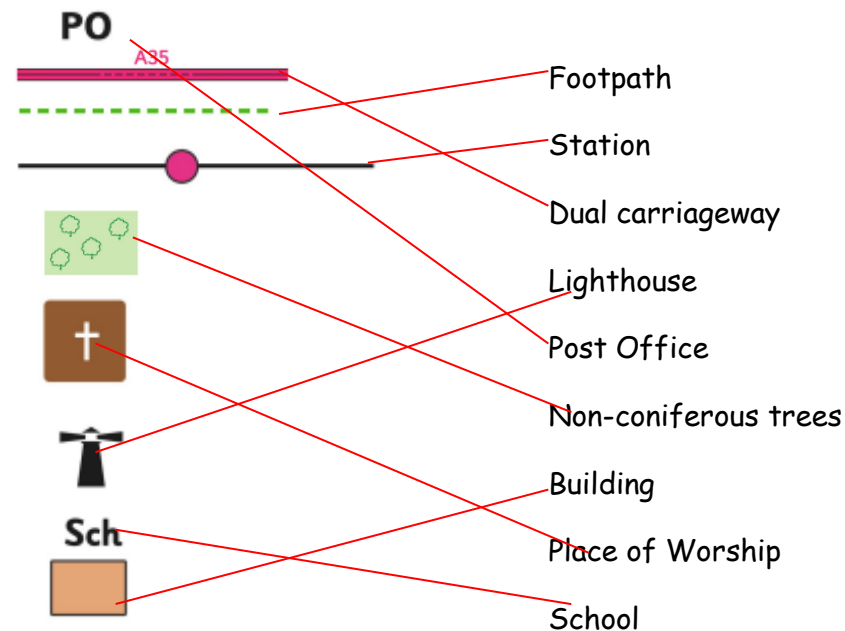
Answers relating to:

-Midday (12 noon) sun is highest in the sky. The sun is highest in the sky at different times in different places in the world.

-divide the world into time zones. Earth is a sphere divided into 360 degrees and it turns 360 degrees in 24 hours. The Earth has 24 different times zones- one for each hour in the day.

-measured from a starting point at England's Greenwich Observatory known as Greenwich Meridian or the Prime Meridian. Time at the Greenwich Meridian is known as Greenwich Mean Time (GMT) or Universal Time.

	London Monday 06:00	Rio de Janeiro Monday 03:00	
	London Thursday 21:45	New York Thursday 16:45	
	London Tuesday 21:30	Edinburgh Tuesday 21:30	
	London Friday 14:22	Milan Friday 15:22	



Tallest Mountain on Each Continent

